

Name _____

8A; Algebra 1

Date _____

Period _____

Do Now

Match the name and the parent function equation to the graphs below.

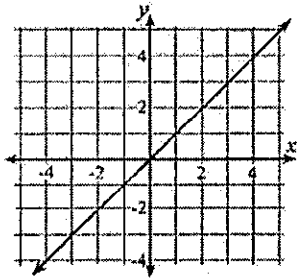
Names:

Equations:

Absolute Value	Square Root	Linear
Quadratic	Cubic	Exponential

$y = \sqrt{x}$	$y = a^x$	$y = x $
$y = x^2$	$y = x^3$	$y = x$

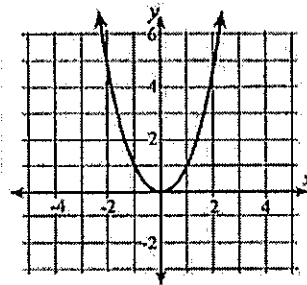
1.



Name: _____

Equation: _____

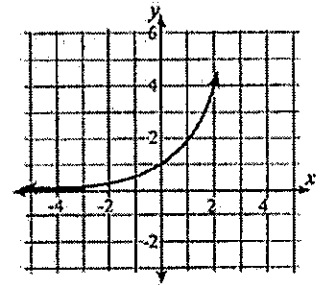
2.



Name: _____

Equation: _____

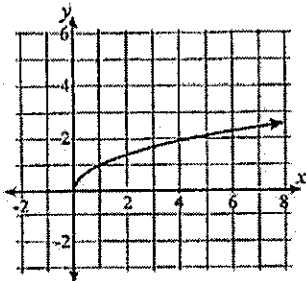
3.



Name: _____

Equation: _____

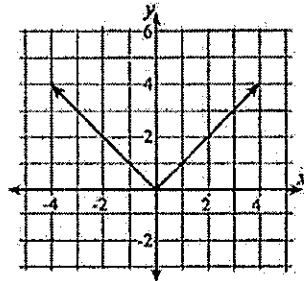
4.



Name: _____

Equation: _____

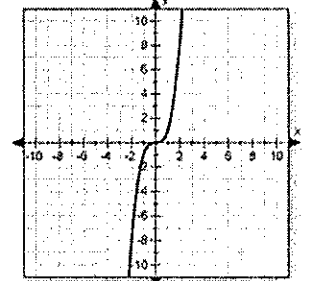
5.



Name: _____

Equation: _____

6.



Name: _____

Equation: _____