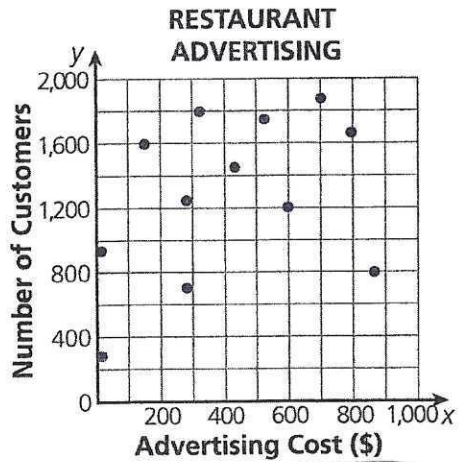


Name Key

Date \_\_\_\_\_

Do Now

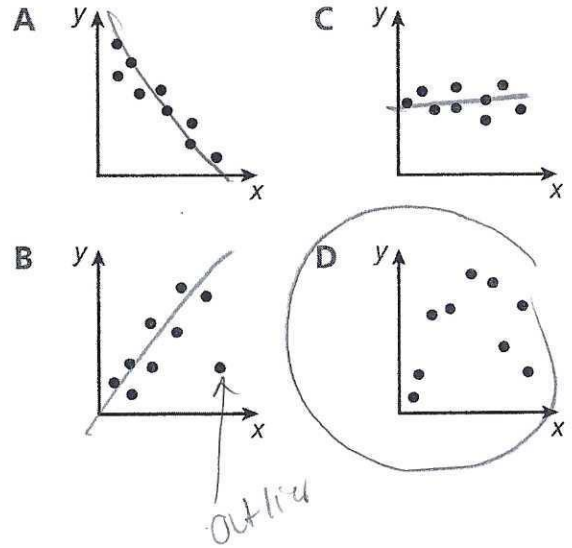
1) What type of correlation does the scatter plot show?



- A positive
- B negative
- C none**
- D undefined

2) Which scatter plot shows a nonlinear relationship between the data?

→ NOT a line (a curve)

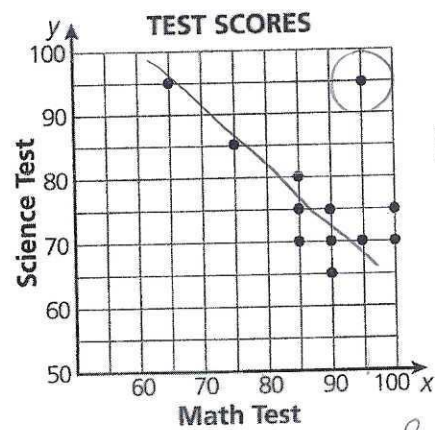


outlier

3) The data points on this scatter plot show the relationship between the scores students received on a math test and a science test.

Which data point represents an outlier?

Answer (95, 95)



Negative Correlation

Cluster Between 85 & 100