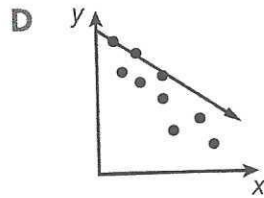
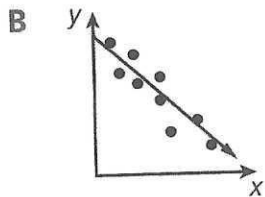
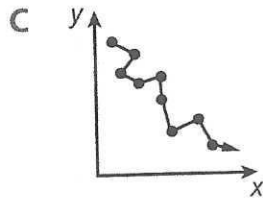
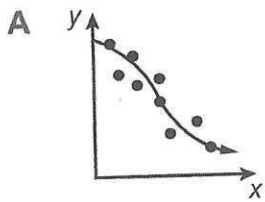


Name _____

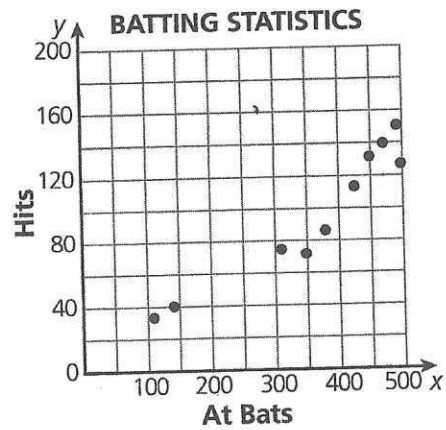
Date _____

Do Now

1 Which scatter plot shows the best line of fit?



2 This scatter plot shows the relationship between the number of times a baseball player was at bat and the number of hits he made during ten seasons he played.



If this baseball player is at bat 250 times his next season, what would be the expected number of hits he makes?

- | | |
|------|------|
| A 20 | C 60 |
| B 40 | D 80 |