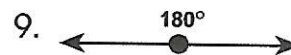
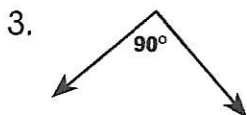
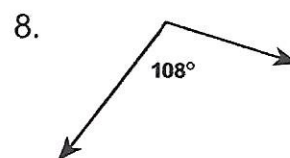
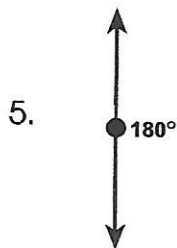
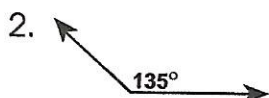
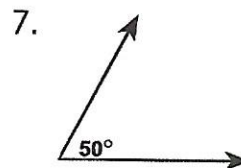
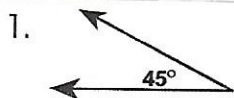


Name: _____
Mrs. Roubos

Date: _____
8R Period _____

Homework

I. Classify the following angles as either: acute, right, obtuse or straight



II. Make a drawing for each of the following descriptions.

10) Point N

11) Line segment MN with point O between points M and N

12) Point C on line AB

13) Ray GH

14) Angle XYZ