

Name _____

Date _____

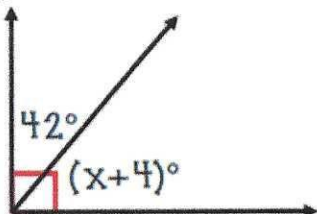
Math 8R

Period _____

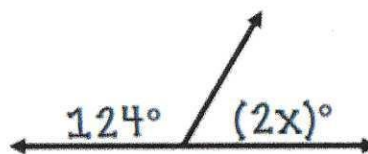
Homework #35b

Solve the following for x

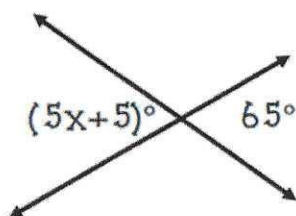
1)



2)



3)



4)

