

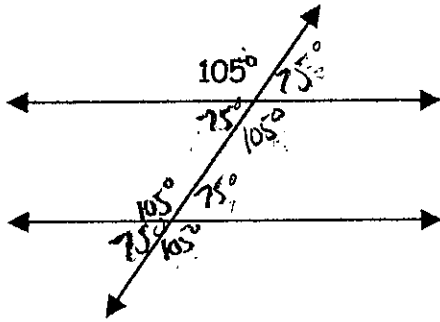
Name Key

Date: _____
8R Period _____

HOMWORK

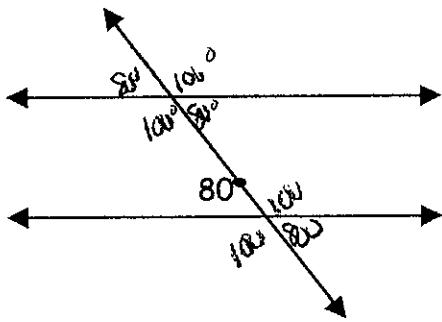
Please find the missing angles, in the following problems. Use the given angle to start:

1)



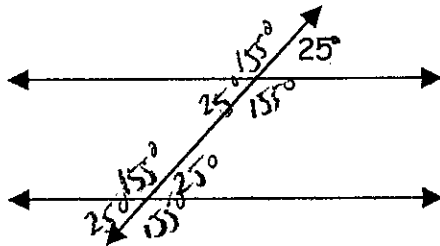
$$\begin{array}{r} 180 \\ -105 \\ \hline 75 \end{array}$$

2)



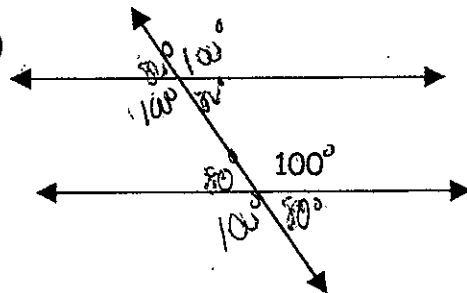
$$\begin{array}{r} 180 \\ -80 \\ \hline 100 \end{array}$$

3)



$$\begin{array}{r} 180 \\ -25 \\ \hline 155 \end{array}$$

4)



$$\begin{array}{r} 180 \\ -100 \\ \hline 80 \end{array}$$

