

Name: _____

Date: _____

Mrs. Roubos

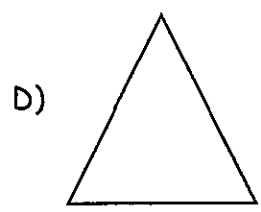
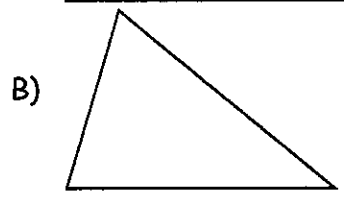

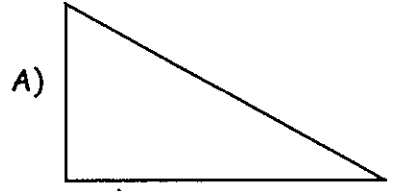
8R Period _____

Homework

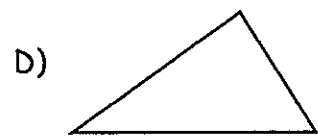
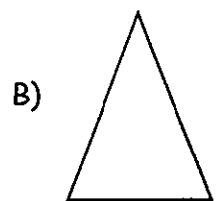
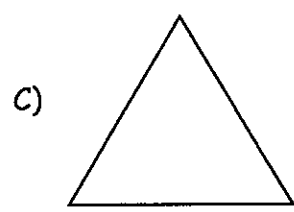
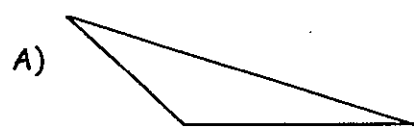
1) What are the sum of the measures of the angles in a triangle?

- A) 360° B) 180° C) 90° D) 540°

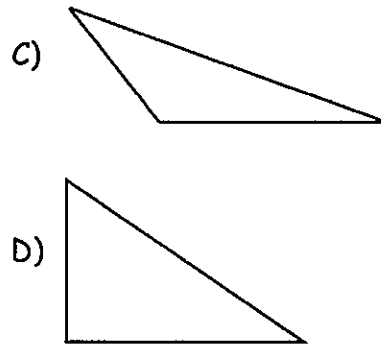
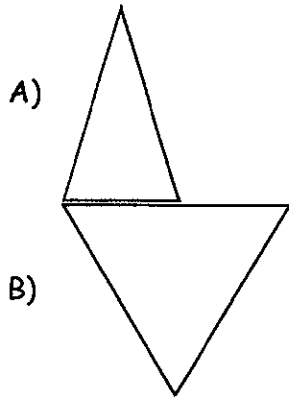
2) Which is a picture of a right triangle?



3) Which picture *appears* to be an isosceles triangle?



4) Which picture *appears* to be an equilateral triangle?



For #5-10 Find the value of each variable, and classify the triangle.

