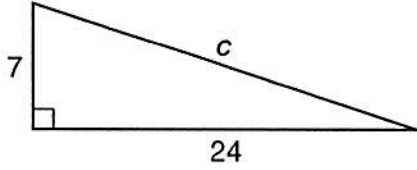


Name: _____
Mrs. Roumbos

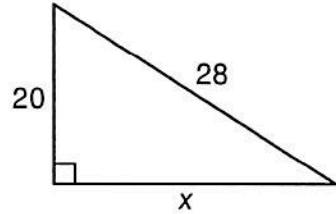
Date: _____
SR Per: _____

Pythagorean Theorem Homework

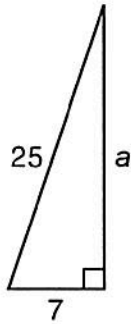
- 1) What is the length of the hypotenuse of the right triangle pictured below?



- 3) What is the measure of the missing leg in the right triangle pictured below?
** nearest tenth*



- 2) What is the measure of the missing leg in the right triangle pictured below?



- 4) What is the side opposite the right angle in a right triangle called?