

Name \_\_\_\_\_

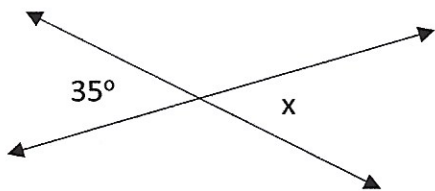
Date \_\_\_\_\_

Mrs. Roubos/Mrs. Haslbauer

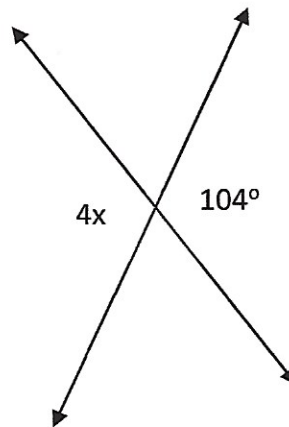
8R Period \_\_\_\_\_

Homework

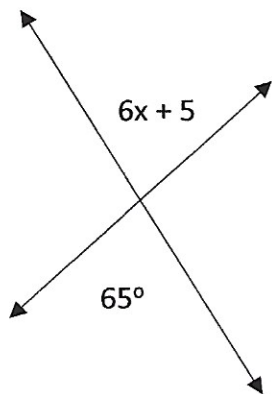
1. Solve for  $x$  in the diagram below.



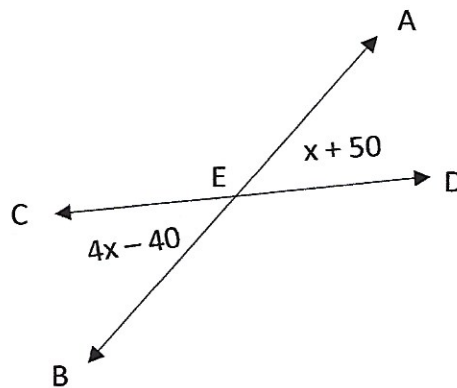
3. Solve for  $x$  in the diagram below.



2. Solve for  $x$  in the diagram below.



4. a. Solve for  $x$  in the diagram below.



b. Solve for  $m\angle CEB$